



1. START
We begin our journey from SOUTHAMPTON

- Day 1
- Day 2
- Day 3
- Day 4
- Day 5

2. We stop off at La Coruna!



5 mins

- Day 6
- Day 7
- Day 8
- Day 9
- Day 10

3. We travel to the AZORES.

10 mins

4. We lay anchor in the Canaries.



- Day 11
- Day 12
- Day 13
- Day 14
- Day 15

5. We leave the Canaries.

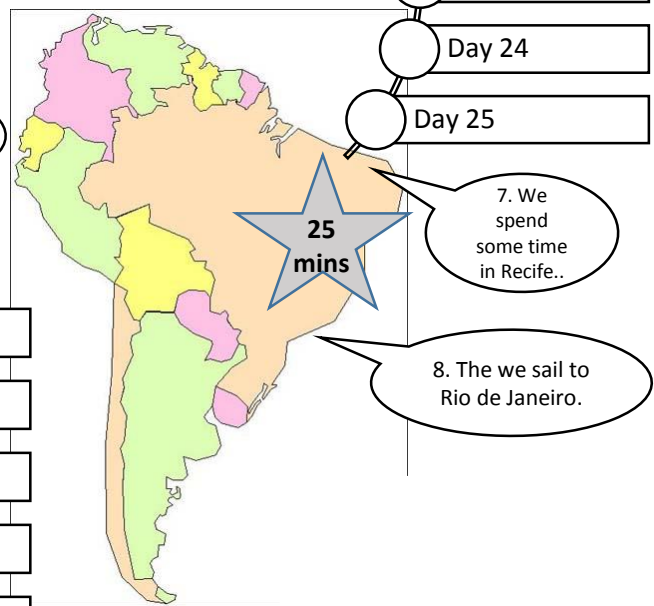
- Day 16
- Day 17
- Day 18
- Day 19
- Day 20

15 mins

6. We spend time sailing around the Cape Verde Islands.

- Day 21
- Day 22
- Day 23
- Day 24
- Day 25

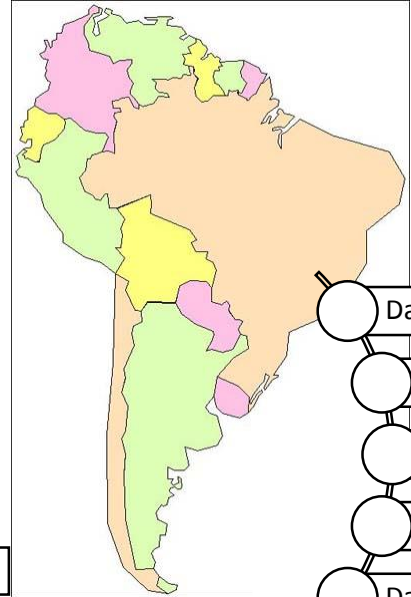
20 mins



25 mins

7. We spend some time in Recife..

8. The we sail to Rio de Janeiro.



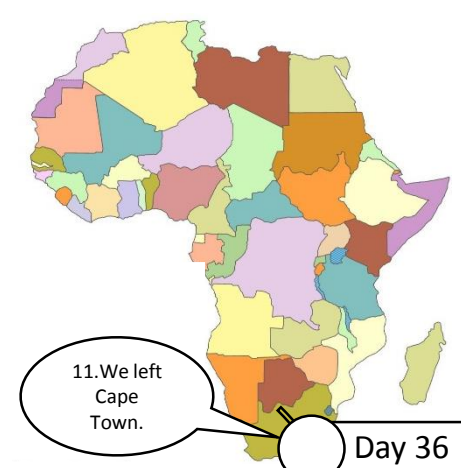
30 mins

9. We visited the island of St Helena.

- Day 26
- Day 27
- Day 28
- Day 29
- Day 30
- Day 31
- Day 32
- Day 33
- Day 34
- Day 35

10. We lay anchor in Cape Town.

35 mins



11. We left Cape Town.

- Day 36
- Day 37
- Day 38
- Day 39
- Day 40
- Day 41

12. We visit Perth and stop off at Sydney too

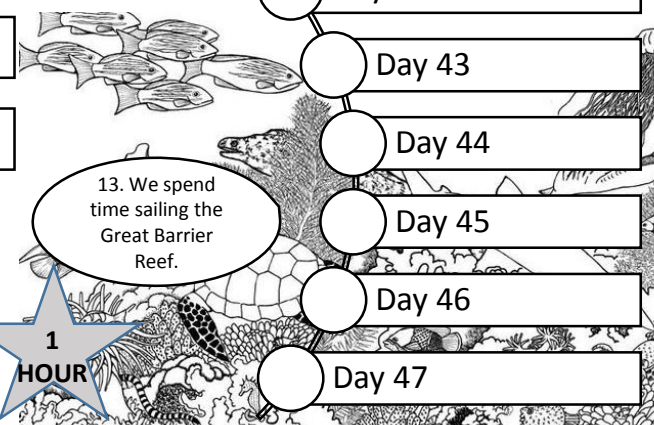
45 mins

- Day 42
- Day 43
- Day 44
- Day 45
- Day 46

13. We spend time sailing the Great Barrier Reef.

1 HOUR

- Day 47





14. We leave the Great Barrier Reef to explore the Coral Sea.

- Day 48
- Day 49
- Day 50
- Day 51
- Day 52



15. DISASTER STRIKES.

- Day 53
- Day 54
- Day 55
- Day 56
- Day 57
- Day 58
- Day 59

- Day 60
- Day 61
- Day 62
- Day 63

1 ½ HOURS

16. Journey complete.

17. Do you want an extra challenge?

- Day 64
- Day 65
- Day 66
- Day 67
- Day 68
- Day 69

Visit Miss Baker for a Deputy Head Award!

- Day 70
- Day 71
- Day 72
- Day 73
- Day 74
- Day 75
- Day 76

Visit Miss Gobell for a Headteacher Award

Around the World Reading Challenge

Terms 3 and 4

Travel around the world with Michael Smith and his family.

Every time you read, you can tick off one of the circles.

Get an adult to sign their name next to the day or month section to show that you have read. For example:

- Day 1 *Wendy Deaif*
- Day 2
- Day 3
- Day 4
- Day 5

The more often you read, the further you will get around the world.

Each time you get to a key destination, you will earn free time minutes! If you get all the way around the world, you will earn 1 ½ hours of free time!

How far will you get by FRIDAY 27th March 2020?